

Name: _____ Date: _____

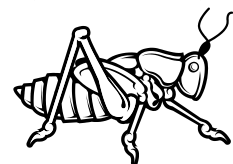


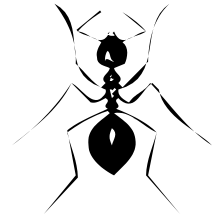





LET'S GRAPH IT!

Look at all the bugs. How many insects have wings, legs, eyes, stingers and antennae?

Which one is **Not** an insect? Put a circle around the one that is not an insect.

Bar Graph



6					
5					
4					
3					
2					
1					
	wings	legs	eyes	stinger	antennae