


Name _____ Date _____

Time to the half hour


Circle the time the clock is showing.




11:30
8:30
6:30



11:30
4:30
10:30



6:30
3:30
3:00



5:30
8:00
3:30

Write the time the clock is showing.





