


Name: \_\_\_\_\_

Directions: Circle the groups of tens and answer the questions.

# Tens and Ones



How many tens?


\_\_\_\_\_

How many ones?

\_\_\_\_\_

How many total balloons? \_\_\_\_\_

1



How many tens?

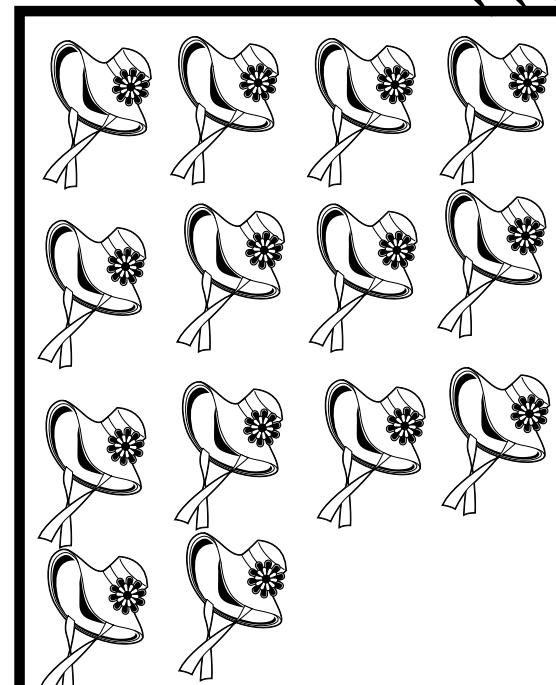
\_\_\_\_\_

How many ones?

\_\_\_\_\_

How many total balloons? \_\_\_\_\_

2



How many tens?

\_\_\_\_\_

How many ones?

\_\_\_\_\_

How many total balloons? \_\_\_\_\_

3

Name: \_\_\_\_\_

Directions: Use the problems on page one to help you answer the questions below.

1. Write the 3 totals for each of the hats on page one.

1 \_\_\_\_\_ 2 \_\_\_\_\_ 3 \_\_\_\_\_

2. Which problem has the greatest number of tens? \_\_\_\_\_ How many? \_\_\_\_\_

3. Which problem has the greatest number of ones? \_\_\_\_\_ How many? \_\_\_\_\_

4. In problem 2 how many more ones do you need to make a group of ten? \_\_\_\_\_

