


Name: _____

Tens and Ones

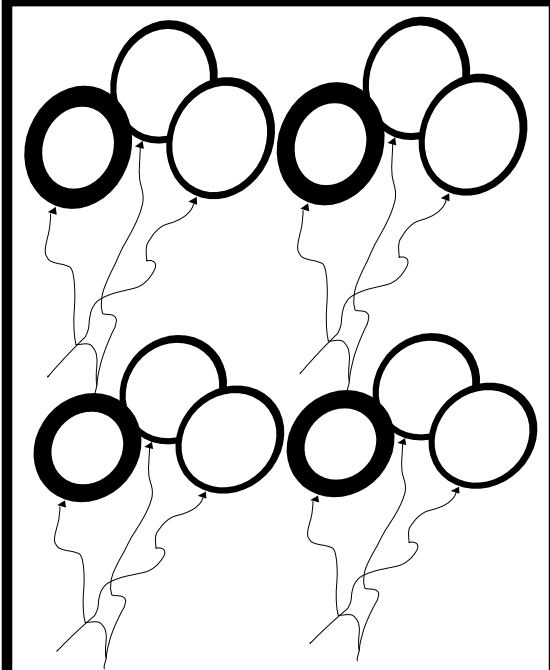


How many tens?

How many ones?

How many total balloons? _____

1




How many tens?

How many ones?

How many total balloons? _____

2



How many tens?

How many ones?

How many total balloons? _____

3

Name: _____

Directions: Use the problems on page one to help you answer the questions below.

1. Write the 3 totals for each of the balloons on page one.

1 _____ 2 _____ 3 _____

2. Which problem has the greatest number of tens? _____ How many? _____

3. Which problem has the greatest number of ones? _____ How many? _____

4. In problem 3 how many more ones do you need to make a group of ten? _____

