


How Many Can You Buy?

Use the coins to figure out many of each item you can buy. Put the answer on the line.




16¢




How many can you buy? _____



9¢



How many can you buy? _____



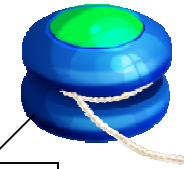
31¢



How many can you buy? _____



12¢



How many can you buy? _____




51¢



How many can you buy? _____



28¢



How many can you buy? _____



83¢



How many can you buy? _____

How much money do you have left? _____