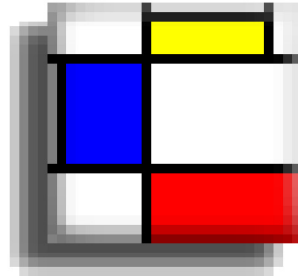


Geometry


Directions: Draw lines in the rectangles to make different shapes.

Write how many lines you drew and tell how many shapes and what new shapes you made.



Drawing _____ line(s)

makes _____.



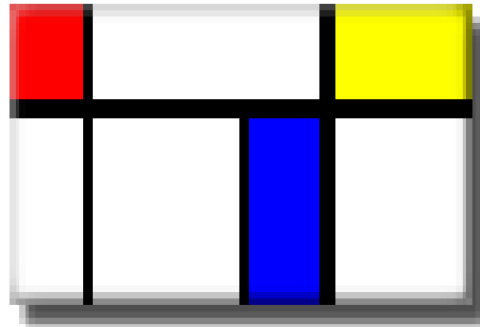
Drawing _____ line(s)

makes _____.



Drawing _____ line(s)

makes _____.



Drawing _____ line(s)

makes _____.