


Name: \_\_\_\_\_

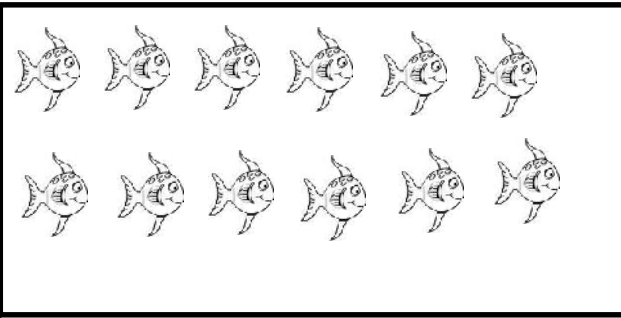
# Catch Some Fish

Color 5 fish



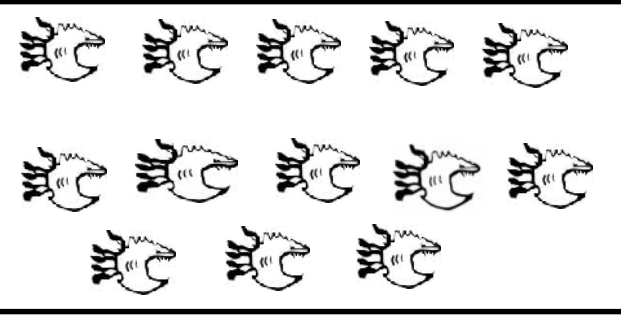
How many fish did you catch? \_\_\_\_\_  
How many fish are left? \_\_\_\_\_  
How many fish are in the pond all together? \_\_\_\_\_  
If you used two nets to catch the fish how many are in each net?  
\_\_\_\_\_ and \_\_\_\_\_

Color 9 fish




How many fish did you catch? \_\_\_\_\_  
How many fish are left? \_\_\_\_\_  
How many fish are in the pond all together? \_\_\_\_\_  
If you used two nets to catch the fish how many are in each net?  
\_\_\_\_\_ and \_\_\_\_\_

Color 6 fish



How many fish did you catch? \_\_\_\_\_  
How many fish are left? \_\_\_\_\_  
How many fish are in the pond all together? \_\_\_\_\_  
If you used two nets to catch the fish how many are in each net?  
\_\_\_\_\_ and \_\_\_\_\_

Color 1 fish



How many fish did you catch? \_\_\_\_\_  
How many fish are left? \_\_\_\_\_  
How many fish are in the pond all together? \_\_\_\_\_  
If you used two nets to catch the fish how many are in each net?  
\_\_\_\_\_ and \_\_\_\_\_