


Name: _____

Going Fishing

Color 3 fish



How many fish did you catch? _____

How many fish are left? _____

How many fish are in the pond all together? _____

If you used two nets to catch the fish how many are in each net?
_____ and _____

Color 6 fish




How many fish did you catch? _____

How many fish are left? _____

How many fish are in the pond all together? _____

If you used two nets to catch the fish how many are in each net?
_____ and _____

Color 2 fish




How many fish did you catch? _____

How many fish are left? _____

How many fish are in the pond all together? _____

If you used two nets to catch the fish how many are in each net?
_____ and _____

Color 1 fish



How many fish did you catch? _____

How many fish are left? _____

How many fish are in the pond all together? _____

If you used two nets to catch the fish how many are in each net?
_____ and _____