

# Adding Three Numbers

Name: \_\_\_\_\_

1.  $5+3+5=$  \_\_\_\_\_  
○

2.  $6+2+5=$  \_\_\_\_\_  
○

3.  $9+1+7=$  \_\_\_\_\_  
○

4.  $6+4+1=$  \_\_\_\_\_  
○

5.  $3+3+3=$  \_\_\_\_\_  
○

6.  $2+4+6=$  \_\_\_\_\_  
○

7.  $7+7+7=$  \_\_\_\_\_  
○

8.  $10+10+10=$  \_\_\_\_\_  
○




9.  $20+20+20=$  \_\_\_\_\_  
○

10.  $12+1+2=$  \_\_\_\_\_  
○

11.  $6+4+8=$  \_\_\_\_\_  
○

12.  $9+5+5=$  \_\_\_\_\_  
○

Make a three number addition problem by drawing pictures and writing the problem.



\_\_\_\_\_ + \_\_\_\_\_ + \_\_\_\_\_ =